

Task 1 (50 points)

Calculate the electrostatic potential outside of the charge distribution

$$\rho(\vec{r}) = \frac{5Q}{a^2} (3 \cos^2 \theta - 1) \delta(r - a). \quad (1)$$

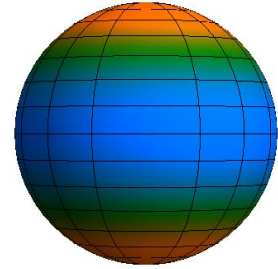
Why does $\rho(\vec{r})$ have the correct physical dimension of charge per volume, as required for a charge distribution? You may use the fact that the angular dependence can be described in terms of a Y_{20} function,

$$Y_{20}(\theta, \phi) = \frac{1}{4} \sqrt{\frac{5}{\pi}} (3 \cos^2 \theta - 1). \quad (2)$$

If red areas mark positive charge, blue areas denote negative charge, and neutral areas are green, then the sphere looks like the one given on the right.

Hint: Your result should look similar to

$$\Phi(\vec{r}) = \frac{Qa^2}{\epsilon_0 r^3} (3 \cos^2 \theta - 1), \quad r > a. \quad (3)$$



Task 2 (50 points)


Calculate the multipole decomposition into monopole, dipole and quadrupole moments for the charge distribution

$$\rho(\vec{r}) = \frac{Q}{a^2} \sin \theta \delta(r - a). \quad (4)$$

Evaluate all multipoles of the given charge distribution with angular momenta $\ell = 0, 1, 2$ and write down the final potential. If red areas mark positive charge, blue areas denote negative charge, and neutral areas are green, then the sphere looks like the one on the right.

Hint: The potential should finally be obtained as follows,

$$\Phi(\vec{r}) = \frac{\pi Q}{4 \epsilon_0 r} - \frac{\pi Q a^2}{64 \epsilon_0 r^3} (3 \cos^2 \theta - 1). \quad (5)$$



Task 3 (50 points)

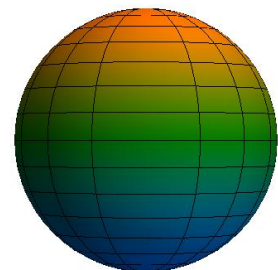
Perform the multipole decomposition for the charge distribution

$$\rho(\vec{r}) = \frac{Q}{a^2} \cos \theta \delta(r - a), \quad (6)$$

with a cosine instead of a sine, as compared to task 1.

Hint: The potential should finally be obtained as follows,

$$\Phi(\vec{r}) = \frac{Qa}{3 \epsilon_0 r^2} \cos \theta. \quad (7)$$



=== PLEASE TURN OVER!!! ===

Task 4 (50 points)

One more charge distribution:

$$\rho(\vec{r}) = \frac{Q}{a^2} \sin^2 \theta \delta(r - a). \quad (8)$$

Please calculate the potential. **You should obtain a monopole and a quadrupole term!**

Hint: The potential should finally be obtained as follows,

$$\Phi(\vec{r}) = \frac{2Q}{3\epsilon_0 r} - \frac{Qa^2}{15\epsilon_0 r^3} (3 \cos^2 \theta - 1). \quad (9)$$

Show all intermediate steps of your calculations.

The tasks are due Thursday, 04-NOV-2021.